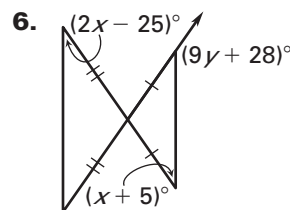
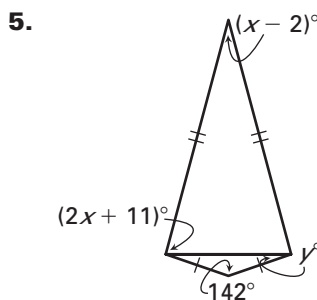
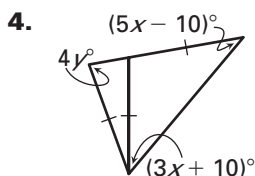
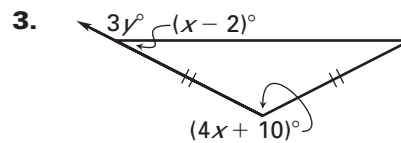
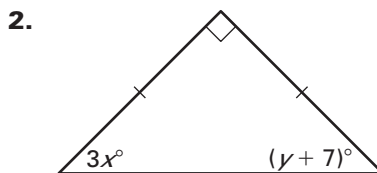
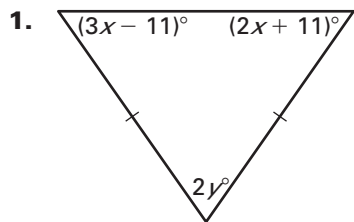
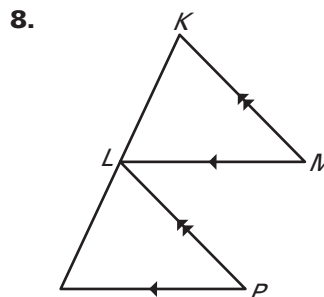
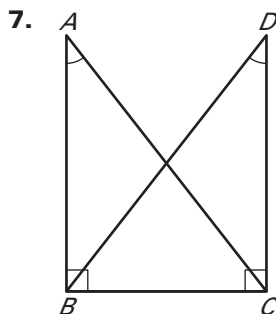


LESSON 4.7 Practice
For use with pages 264–270

Find the values of x and y .

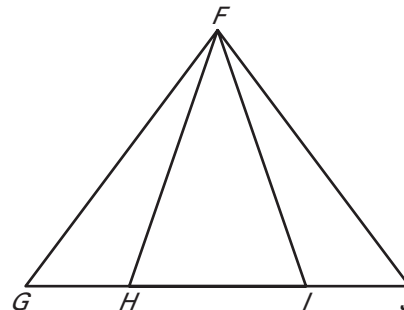


Decide whether enough information is given to prove that the triangles are congruent. *Explain* your answer.

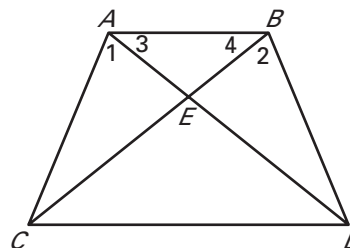


LESSON
4.7**Practice** *continued*
For use with pages 264–270**In Exercises 9 and 10, complete the proof.****9. GIVEN:** $\overline{FG} \cong \overline{FJ}$, $\overline{HG} \cong \overline{IJ}$ **PROVE:** $\overline{HF} \cong \overline{IF}$

Statements	Reasons
1. $\overline{FG} \cong \overline{FJ}$	1. ?
2. ?	2. Base Angles Theorem
3. $\overline{HG} \cong \overline{IJ}$	3. ?
4. ?	4. SAS Congruence Postulate
5. $\overline{HF} \cong \overline{IF}$	5. ?

**10. GIVEN:** $\angle 1 \cong \angle 2$, $\overline{AC} \cong \overline{BD}$ **PROVE:** $\angle 3 \cong \angle 4$

Statements	Reasons
1. $\angle 1 \cong \angle 2$	1. ?
2. $\overline{AC} \cong \overline{BD}$	2. ?
3. $\triangle AEC \cong \triangle BED$	3. ?
4. ?	4. AAS Congruence Theorem
5. $\overline{AE} \cong \overline{BE}$	5. ?
6. $\angle 3 \cong \angle 4$	6. ?



LESSON
4.7
Practice *continued*
For use with pages 264–270

In Exercises 11–16, use the diagram. Complete the statement. Tell what theorem you used.

11. If $\overline{PQ} \cong \overline{PT}$, then $\angle _? \cong \angle _?$.

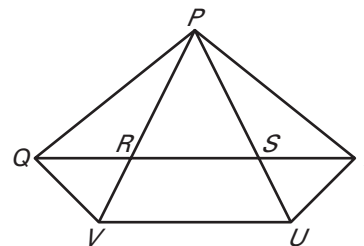
12. If $\angle PQV \cong \angle PVQ$, then $_? \cong _?$.

13. If $\overline{RP} \cong \overline{SP}$, then $\angle _? \cong \angle _?$.

14. If $\overline{TP} \cong \overline{TR}$, then $\angle _? \cong \angle _?$.

15. If $\angle PSQ \cong \angle SPQ$, then $_? \cong _?$.

16. If $\angle PUV \cong \angle PVU$, then $_? \cong _?$.



In Exercises 17–19, use the following information.

Prize Wheel A radio station sets up a prize wheel when they are out promoting their station. People spin the wheel and receive the prize that corresponds to the number the wheel stops on. The 9 triangles in the diagram are isosceles triangles with congruent vertex angles.

17. The measure of the vertex angle of triangle 1 is 40° . Find the measures of the base angles.

18. Explain how you know that triangle 1 is congruent to triangle 6.

19. Trace the prize wheel. Then form a triangle whose vertices are the midpoints of the bases of the triangles 1, 4, and 7. What type of triangle is this?

